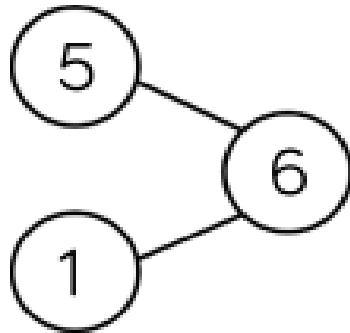



Mrs Harvey and Miss Ottaways' Maths group home learning 18.3.22

This week we have been finding number families and comparing number sentences.

Can you use your knowledge to have a go at the challenges below?

Use the counters and the part-whole model to fill in the missing numbers.



$$1 + \underline{\quad} = 6$$

$$\underline{\quad} + 1 = 6$$

$$\underline{\quad} = \underline{\quad} + 1$$

$$6 = \underline{\quad} + \underline{\quad}$$


Complete the number sentences.




$$\underline{\quad} + \underline{\quad} = 7 \quad 7 = \underline{\quad} + \underline{\quad}$$

$$\underline{\quad} + \underline{\quad} = 7 \quad 7 = \underline{\quad} + \underline{\quad}$$

Complete using <, > or =



$$\underline{\quad} + \underline{\quad}$$



$$\underline{\quad} + \underline{\quad}$$



$$\underline{\quad} - \underline{\quad}$$



$$\underline{\quad} - \underline{\quad}$$