

Mrs Andrews' Maths Group Home Learning 11.3.22

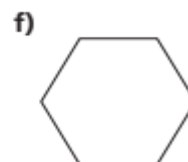
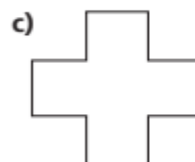
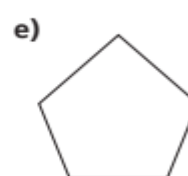
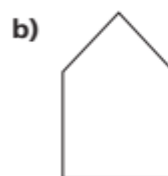
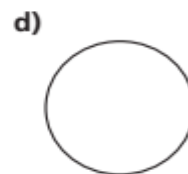

This week we have begun to explore lines of symmetry.

Can you use your new knowledge to answer the challenges below?

Tick the shapes that have a vertical line of symmetry.


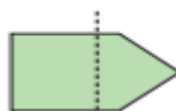


Draw the vertical line of symmetry on each shape.



Annie is drawing a vertical line of symmetry on some shapes.

Tick the shapes that have a correct line of symmetry.



Talk to a partner about any mistakes Annie has made.