

# Mrs Andrews Maths Group Home Learning

25.2.22

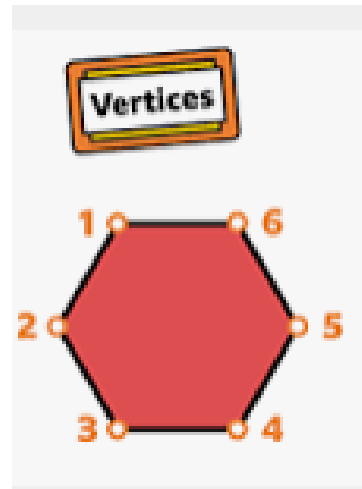
This week we have been looking at the properties of 2D and 3D shapes.

Can you have a go at the challenges below?

## Count Vertices on 2D Shapes








In each row, count the vertices on each shape and circle the odd one out. Explain your answers.



## Count Vertices on 2D Shapes



Count the vertices and complete the table.

Shape	Name	Number of Vertices
	square	_____
	triangle	_____
	pentagon	_____
	hexagon	_____
	rectangle	_____

