

Mrs Andrews' Maths Group Home Learning 11.2.22

This week, we have continued our work on statistics.
Can you use your knowledge to answer the questions below?

Dora, Dexter and Jack play basketball at break time.

They record the goals they score in a pictogram.



Two classes go on a trip to the zoo together.
There are two coaches to take both classes.



a) Complete the sentences.

Dora scores goals.

Dexter scores goals.

Jack scores goals.

Key

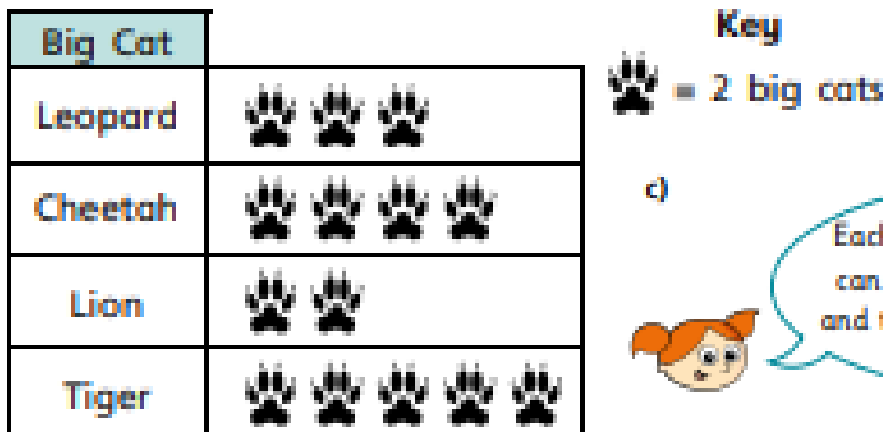
 = 10 children

Tick the correct answer.

a) Which coach has more boys?



Coach 1 Coach 2 They have the same

At the zoo, Mo keeps a record of how many big cats he sees.



c)



Each  represents 2 big cats so I can just double the amount of  and that will be how many big cats there are.

Is Alex correct? _____

How do you know?