


Year 1 Maths Home Learning 04.2.22

This week we have been practising our subtraction skills!

Can you use your knowledge to find the difference of these sums?

Tom has 5 pencils.

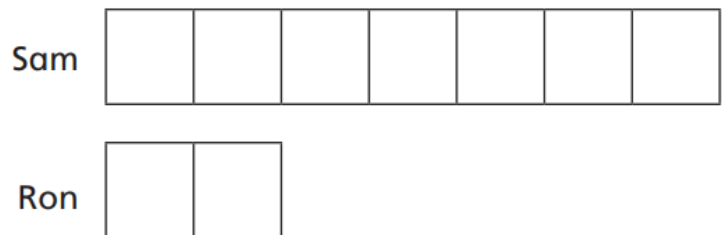
Max has 8 pencils.



What is the difference between the number of pencils?

The difference between the number of pencils is

Here is a bar model.




What does the bar model show?

What can you work out?

True or False?

Subtraction - finding the difference

Eva has 3 sweets. 

Mo has 5 sweets. 

How many more sweets does Mo have?



Mo has 8 more sweets than Eva.