



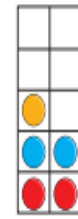


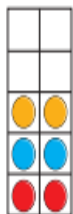




## Year 2 Maths Home Learning 28.01.22

This week we have been investigating whether numbers are odd or even. Can you show your understanding by having a go at the questions below?

Eva uses counters to make the numbers from 1 to 10

				
<input type="checkbox"/>	<input type="checkbox"/>	<input type="checkbox"/>	<input type="checkbox"/>	<input type="checkbox"/>

				
<input type="checkbox"/>	<input type="checkbox"/>	<input type="checkbox"/>	<input type="checkbox"/>	<input type="checkbox"/>

Draw circles to show the groups.

a) Group the shoes in 2s to show that 16 is even.



b) Group the socks in 2s to show that 17 is odd.



Tick all the numbers that are even.

What do you notice about all the even numbers?

**Colour all the even numbers.**

1	2	3	4	5	6	7	8	9	10
11	12	13	14	15	16	17	18	19	20
21	22	23	24	25	26	27	28	29	30
31	32	33	34	35	36	37	38	39	40
41	42	43	44	45	46	47	48	49	50

What do you notice about the last digit of all the even numbers?