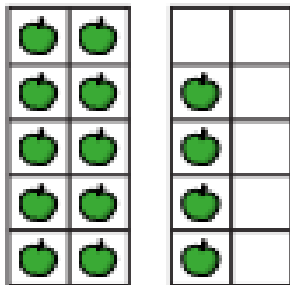



## Year 1 Maths Home Learning 14.01.22

This week we have shown our understanding of tens and ones using different representations.

Can you use your skills to solve the problems below?


How many apples are there?



There are  tens and  ones.

There are  apples.

What number is shown?



There are  tens and  ones.

The number shown is

Complete the number sentences.

a) 1 ten and 8 ones =

b)  = 2 tens and 5 ones

c) 41 =  tens and  one

d) 37 ones =  tens and  ones

e) 2 tens and 10 ones =