

Year 1 Maths Home Learning 7.01.22

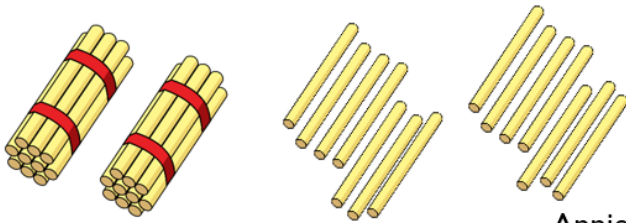
This week we have been using our knowledge of counting in tens.
Can you solve these number problems using your new understanding?

Whitney says,



I have 2 tens and 14 ones.

How many straws does Whitney have?



How else could Whitney group these straws?

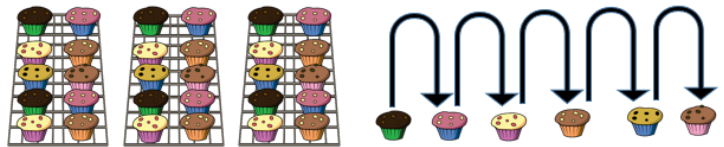
Clue—think about your groups of 10s!

Annie counts how many muffins she has.



I have 35 muffins.

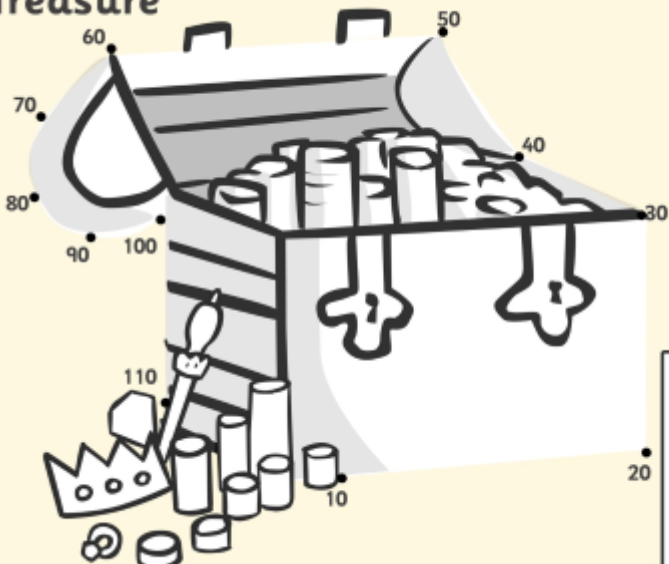
Make sure to help Annie check her careful counting skills!
Has she said a number twice?



30	31	32	33	34	35	36	37	38	39	40
----	----	----	----	----	----	----	----	----	----	----

Do you agree with Annie?
Explain your answer.

Treasure



Can you join the dots, counting in 10s as you go!