

Year 2 Maths Home Learning 12.11.21

This week we would like you to use your skills to practise your number line addition.


Remember to be careful with you counting on, making sure you don't miss any numbers!

Number Line Addition


Roll one dice and write it in the box to complete the number sentence.
Use the number line to count on and solve the calculation.



$$15 + \square = \square$$



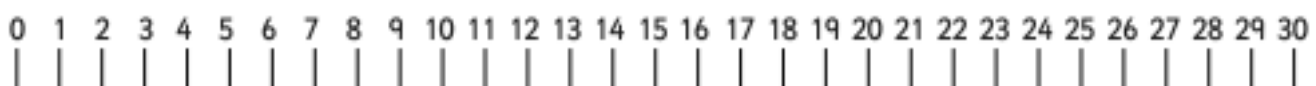
$$18 + \square = \square$$



$$\square + 14 = \square$$



$$\square + 19 = \square$$



$$22 + \square = \square$$

