


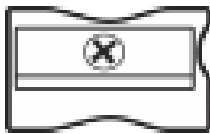
Year 1 Maths Home Learning 2.7.21

This week we have been learning about length and height. We have used CM to help us measure. Can you read these rulers and measure accurately?



cm

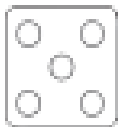
0 1 2 3 4 5 6 7 8 9 10 11 12 13 14 15



cm

0 1 2 3 4 5 6 7 8 9 10 11 12 13 14 15

cm




0 1 2 3 4 5 6 7 8 9 10

cm



0 1 2 3 4 5 6 7 8 9 10

cm



0 1 2 3 4 5 6 7 8 9 10

Draw three lines, can you use your Maths vocabulary to label them?

Use these words to help you:

tall, taller, tallest, short, shorter, shortest, long, longer, longest.