

Year 1 Maths Friday 24th April 2020



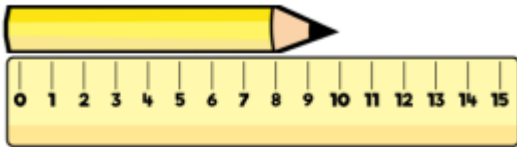
Ladybird Length!



LO: To be able to measure objects using a ruler.

We have some problems for you to solve today! Don't forget to record your workings in your books and use all your new Maths vocabulary and skills you have learnt this week to help you!

Teddy measures the length of the pencil.



He says,



The length of the pencil is 10 cm.


Do you agree with Teddy?
Explain why.

Eva, Dexter and Rosie are comparing ribbons that they have. Unfortunately, Dexter has lost his ribbon.

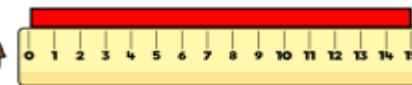
He says,



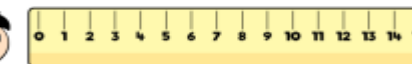
My ribbon is shorter than Rosie's, but longer than Eva's.



Eva



Rosie



Dexter

How long could Dexter's ribbon be?

To finish the week have a go at some of these online Maths games:

<https://www.topmarks.co.uk/maths-games/measuring-in-cm>